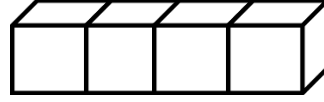
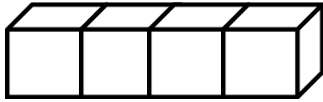




ΔΗΜΟΤΙΚΟ ΣΧΟΛΕΙΟ

Όνομα: _____ Τάξη: _____

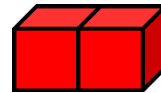
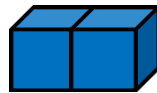
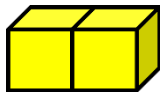
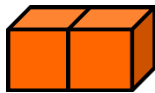
Εισαγωγή στον πολλαπλασιασμό



$$\square + \square = \square$$

\square φορές \square κάνουν \square

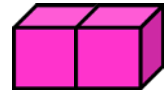
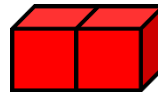
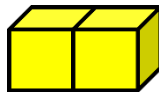
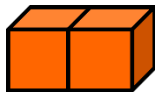
$$\square \times \square = \square$$



$$\square + \square + \square + \square = \square$$

\square φορές \square κάνουν \square

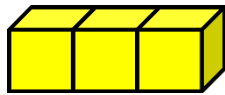
$$\square \times \square = \square$$



$$\square + \square + \square + \square + \square = \square$$

\square φορές \square κάνουν \square

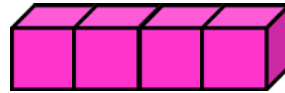
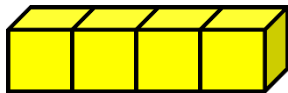
$$\square \times \square = \square$$



$$\square + \square = \square$$

\square φορές \square κάνουν \square

$$\square \times \square = \square$$






$$\square + \square = \square$$

\square φορές \square κάνουν \square

$$\square \times \square = \square$$

2. Σχεδίασε 2 κεράκια σε κάθε τούρτα:



$$\square + \square + \square = \square$$

\square φορές \square κάνουν \square

$$\square \times \square = \square$$